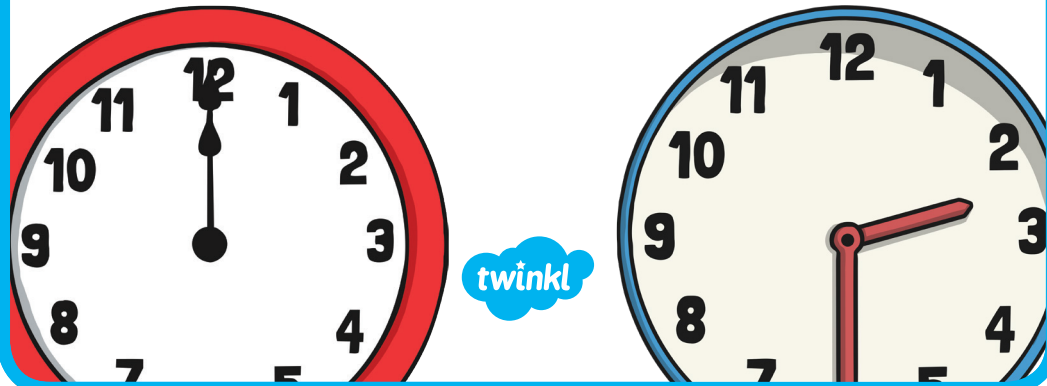


Time

Forwards and Backwards

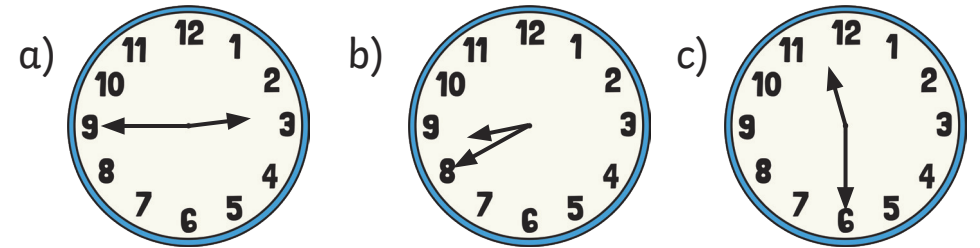
Challenge Cards



Time: Forwards and Backwards

1. In the springtime, the clocks are put forward one hour.

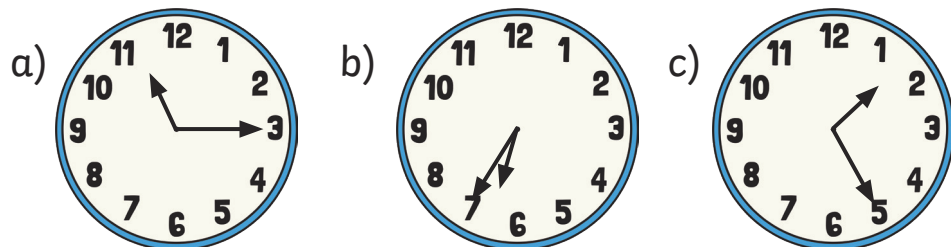
What time will these clocks show after they have been put forward?



Time: Forwards and Backwards

2. In the autumn time, all clocks will go back one hour.

What time will these clocks show after they have been put back?



Time: Forwards and Backwards

3. Amir has one hour to get ready for football training. He needs to leave the house at ten to 6. What time is it now?

Time: Forwards and Backwards

4. Lily's football match started at quarter past 11.
- a) Half-time will be in 45 minutes.
What time will that be?
 - b) What time will the second half begin,
if half-time lasts 15 minutes?

twinkl.com

Time: Forwards and Backwards

5. Harry usually goes to bed at twenty to 8.
- a) On Fridays, he is allowed to stay up 1 hour later.
What time will he go to bed on a Friday?
 - b) Harry was ill last Wednesday, and he
went to bed an hour earlier than his usual
bedtime. What time would that have been?

twinkl.com

Time: Forwards and Backwards

6. Halima gets home from school at twenty-five minutes past four. She went to Art Club for half an hour after school, and it took her half an hour to get home. What time did the school day end?

twinkl.com

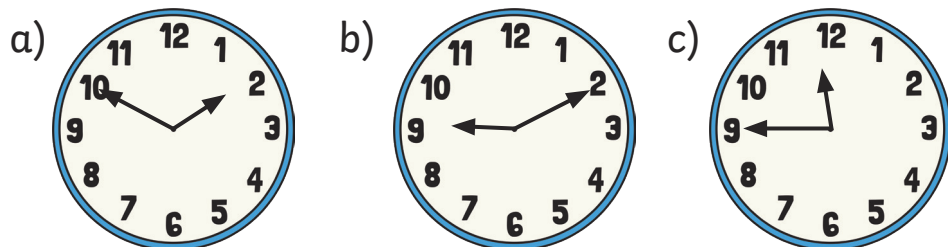
Time: Forwards and Backwards

7. The Singh family are going on holiday. They will arrive in 1 hour at their hotel. It is now twenty-five minutes to 3. What time will they arrive?

twinkl.com

Time: Forwards and Backwards

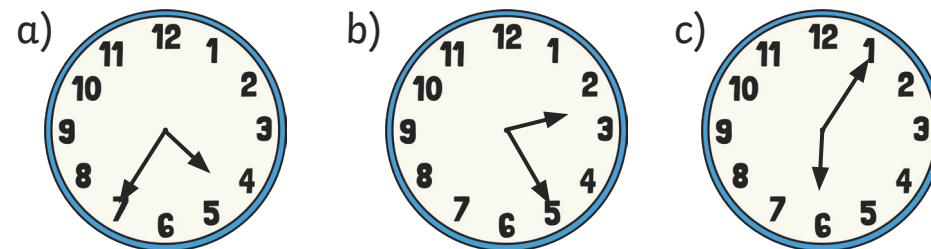
8. What time will these clocks show in one hour's time?



twinkl.com

Time: Forwards and Backwards

9. What time did these clocks show one hour ago?



twinkl.com

Time: Forwards and Backwards

10. a) Frankie will start his swimming lesson in one hour. It is now fifteen minutes past nine. What time will Frankie start his swimming lesson?

b) The lesson lasts for one hour.
What time will it finish?

twinkl.com

Time: Forwards and Backwards **Answers**

- a) quarter to 4 b) twenty to 10 c) half past 12
- a) quarter past 10 b) twenty-five minutes to 5
c) twenty-five minutes past 12
- ten to 5
- a) twelve o'clock b) quarter past 12
- twenty to 9 b) twenty to 7
- twenty-five minutes past 3
- twenty-five minutes to 4
- a) ten to 3 b) ten past 10 c) quarter to 1
- a) twenty-five minutes to 4 b) twenty-five minutes past 1
c) five past 5
- a) quarter past 10 b) quarter past 11

twinkl.com