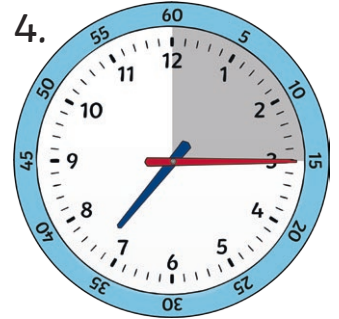
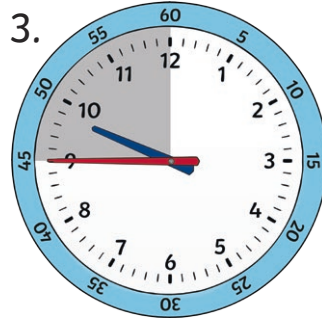
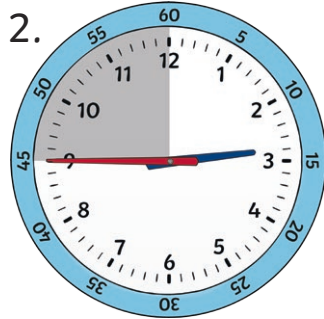
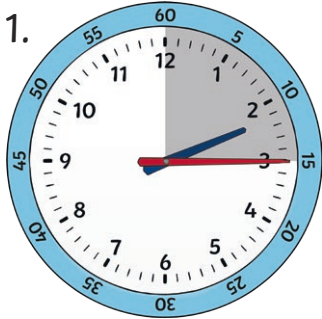


Telling the Time - Quarter Past, Quarter to and Half Past

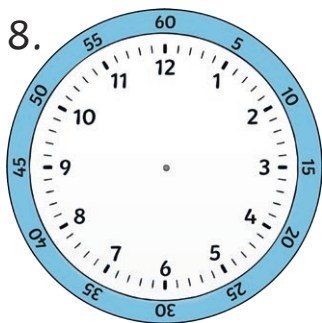
Are these clocks showing quarter to or quarter past?



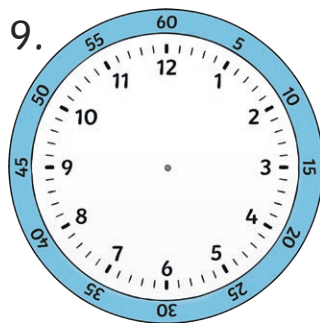
5. If the big hand starts at 12, it takes _____ minutes to get to quarter past.

6. If the big hand starts at 12, it takes _____ minutes to get to quarter to.

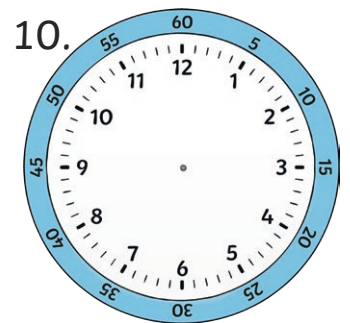
7. If the big hand starts at 12, it takes _____ minutes to get to half past.



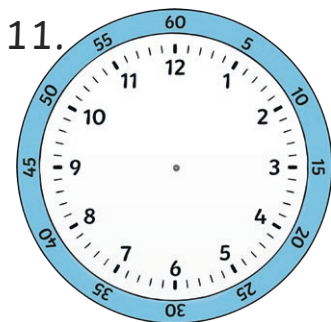
Quarter to 4



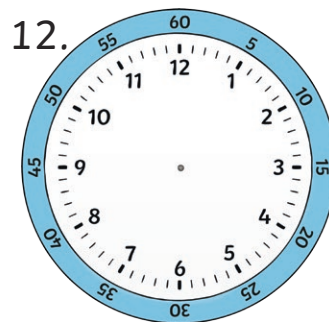
Half past 3



Quarter past 10



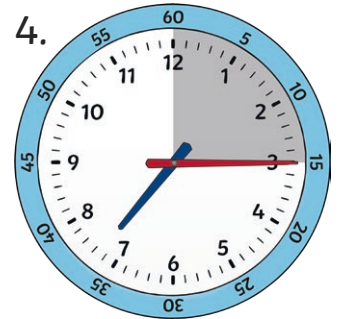
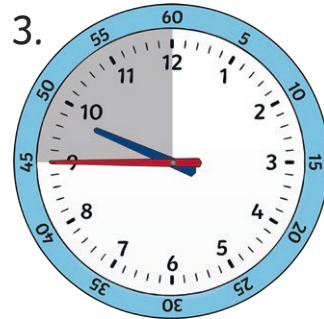
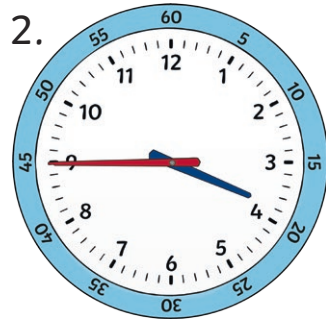
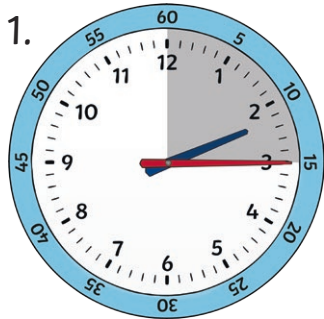
Quarter to 12



Quarter past 5

Telling the Time - Quarter Past, Quarter to and Half Past

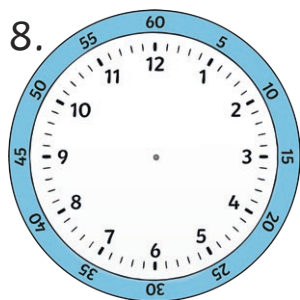
Are these clocks showing quarter to or quarter past?



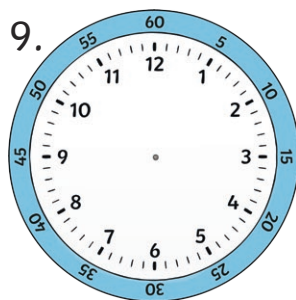
5. If the big hand starts at 12, how long does it take to get to quarter past?

6. How long would the big hand take to reach quarter to if it started from 12?


7. How long would it take to get to half past from 12?



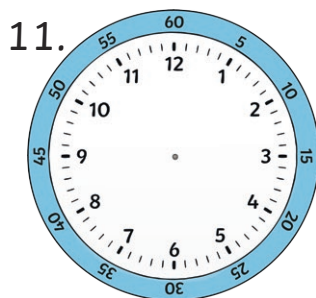
Quarter to 4



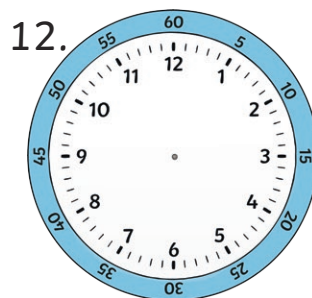
Half past 3



Quarter past 10



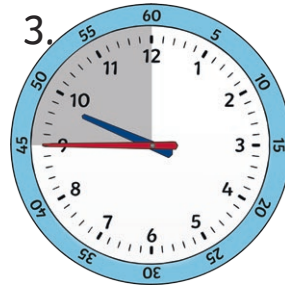
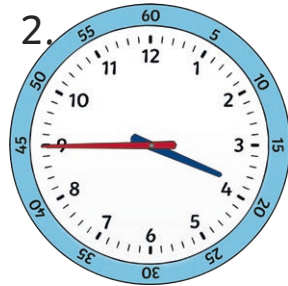
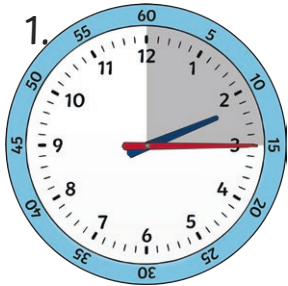
Quarter to 12



Quarter past 5

Telling the Time - Quarter Past, Quarter to and Half Past

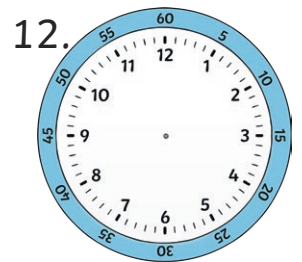
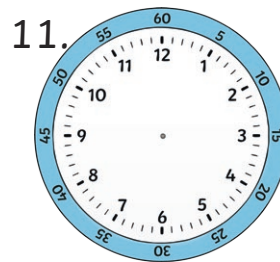
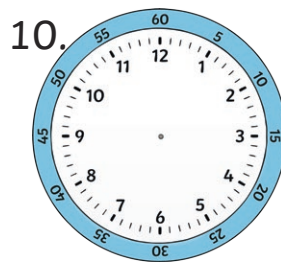
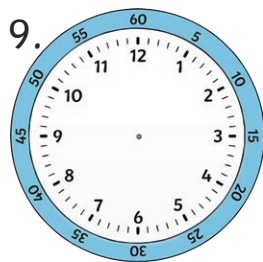
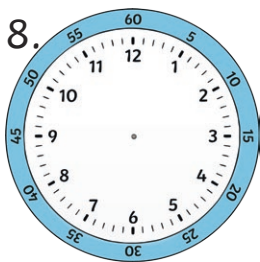
Are these clocks showing quarter to or quarter past?



5. If the big hand starts at 12, how long does it take to get to quarter past?

6. How long would the big hand take to reach quarter to if it started from 12?

7. How long would it take to get to half past from 12?



Quarter to 4

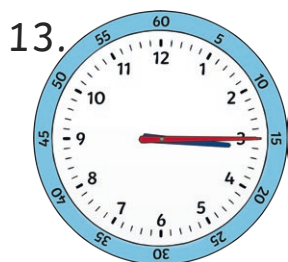
Half past 3

Quarter past 10


Quarter to 12

Quarter past 5

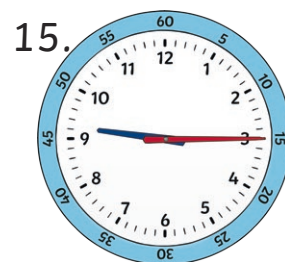
Are these sentences correct?



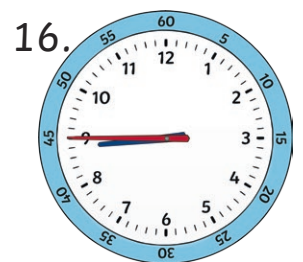
Quarter to 3



Half past 5



Quarter past 9




Quarter to 9

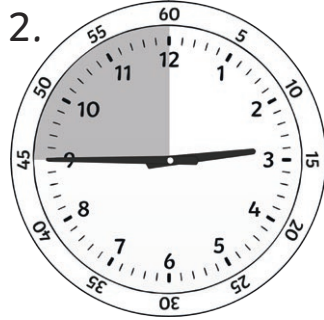
Telling the Time - Quarter Past, Quarter to and Half Past

Answers


Are these clocks showing quarter to or quarter past?




Quarter Past



Quarter To



Quarter to




Quarter Past


5. If the big hand starts at 12, it takes **15** minutes to get to quarter past.

6. If the big hand starts at 12, it takes **45** minutes to get to quarter to.


7. If the big hand starts at 12, it takes **30** minutes to get to half past.




Quarter to 4




Half past 3



Quarter past 10



Quarter to 12




Quarter past 5

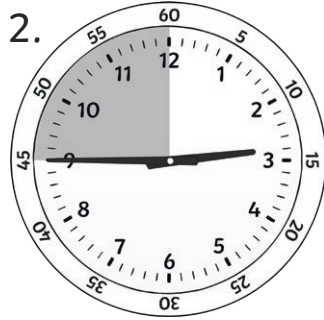
Telling the Time - Quarter Past, Quarter to and Half Past

Answers


Are these clocks showing quarter to or quarter past?




Quarter Past



Quarter To



Quarter to

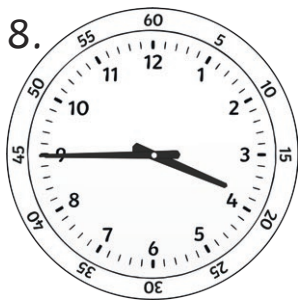


Quarter Past


5. If the big hand starts at 12, how long does it take to get to quarter past?
15 minutes

6. How long would the big hand take to reach quarter to if it started from 12?
45 minutes


7. How long would it take to get to half past from 12?
30 minutes




Quarter to 10




Half past 3



Quarter past 10



Quarter to 12




Quarter past 12

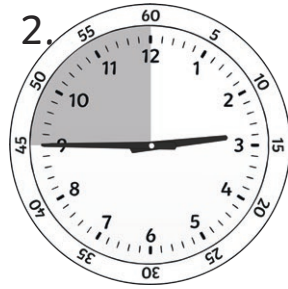
Telling the Time - Quarter Past, Quarter to and Half Past

Answers


Are these clocks showing quarter to or quarter past?




Quarter Past



Quarter To



Quarter to



Quarter Past

5. If the big hand starts at 12, how long does it take to get to quarter past?


15 minutes

6. How long would the big hand take to reach quarter to if it started from 12?


45 minutes

7. How long would it take to get to half past from 12?


30 minutes




Quarter to 4




Half past 3



Quarter past 10




Quarter to 12




Quarter past 5

Are these sentences correct?




Quarter to 3

No




Half past 5

No



Quarter past 9

Yes



Quarter to 9

Yes